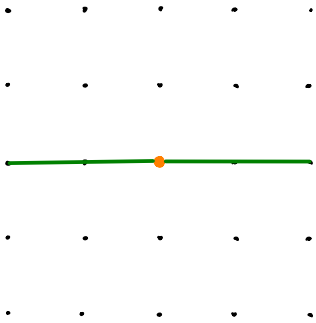


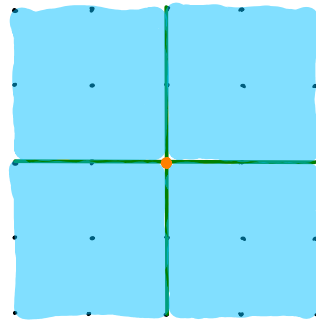
# Problem Set 2

Identify the toric surface  $X_\Sigma$  for each of the following fans  $\Sigma$  in  $N \cong \mathbb{Z}^2$ .

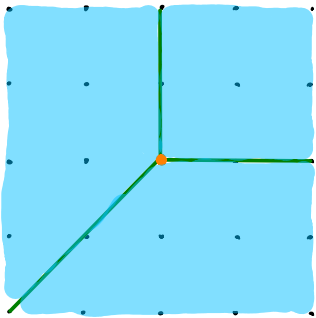
1)



2)



3)



4)

